


Count how much money is in each pot of gold to see what it costs. Work out your change from 50c.

1.



Cost: ___ Change: ___

2.




Cost: ___ Change: ___

3.



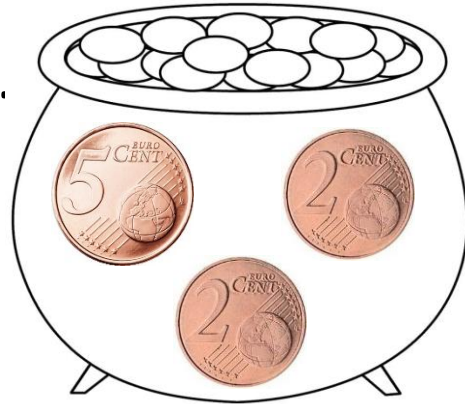
Cost: ___ Change: ___

4.




Cost: ___ Change: ___

5.



Cost: ___ Change: ___

6.



Cost: ___ Change: ___


Count how much money is in each pot of gold to see what it costs. Work out your change from 50c.

1.



Cost: ___ Change: ___

2.



Cost: ___ Change: ___

3.




Cost: ___ Change: ___

4.



Cost: ___ Change: ___

5.



Cost: ___ Change: ___

6.



Cost: ___ Change: ___


Count how much money is in each pot of gold to see what it costs. Work out your change from €1.00.

1.



Cost: ___ Change: ___

2.



Cost: ___ Change: ___

3.



Cost: ___ Change: ___

4.



Cost: ___ Change: ___

5.



Cost: ___ Change: ___

6.



Cost: ___ Change: ___


Count how much money is in each pot of gold to see what it costs. Work out your change from €1.00.

1.



Cost: ___ Change: ___

2.



Cost: ___ Change: ___

3.



Cost: ___ Change: ___

4.



Cost: ___ Change: ___

5.



Cost: ___ Change: ___

6.



Cost: ___ Change: ___